
GEOGRAPHY

9696/31

Paper 3 Advanced Human Options

May/June 2016

INSERT

1 hour 30 minutes

READ THESE INSTRUCTIONS FIRST

This Insert contains the Photograph and all the Figures referred to in the questions.



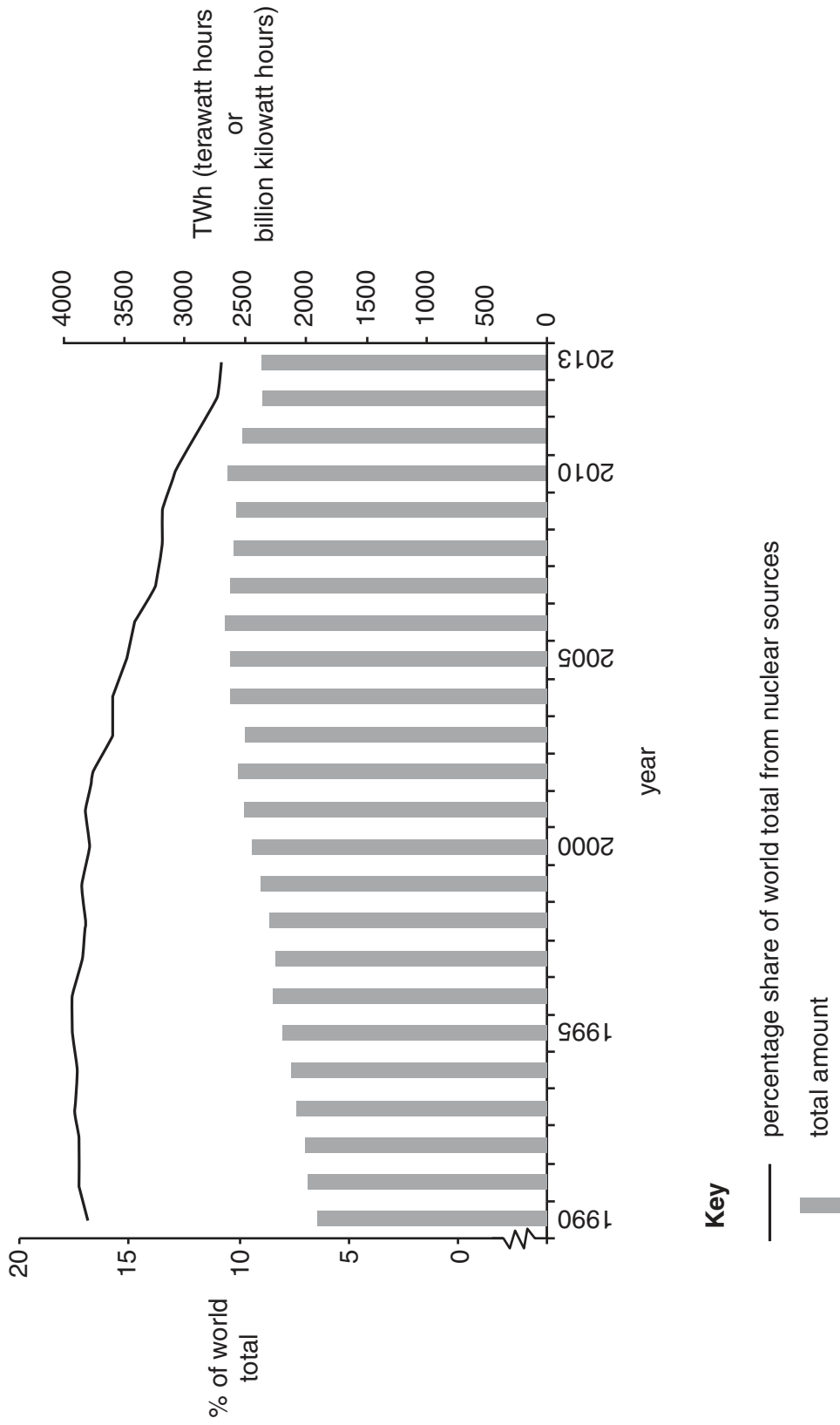
This document consists of **7** printed pages and **1** blank page.

Photograph A for Question 1

An oil palm plantation in the tropical rainforest in Malaysia, an NIC in SE Asia



Fig. 1 for Question 3
Amount and share of electricity produced from nuclear sources in the world, 1990–2013

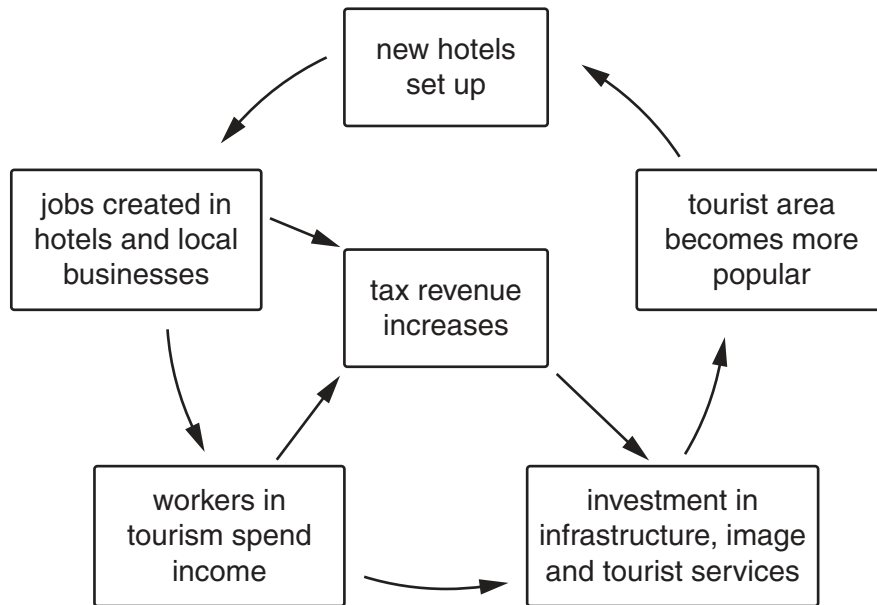


Key

- percentage share of world total from nuclear sources
- total amount

Fig. 2 for Question 6

A model of the multiplier effect applied to tourism

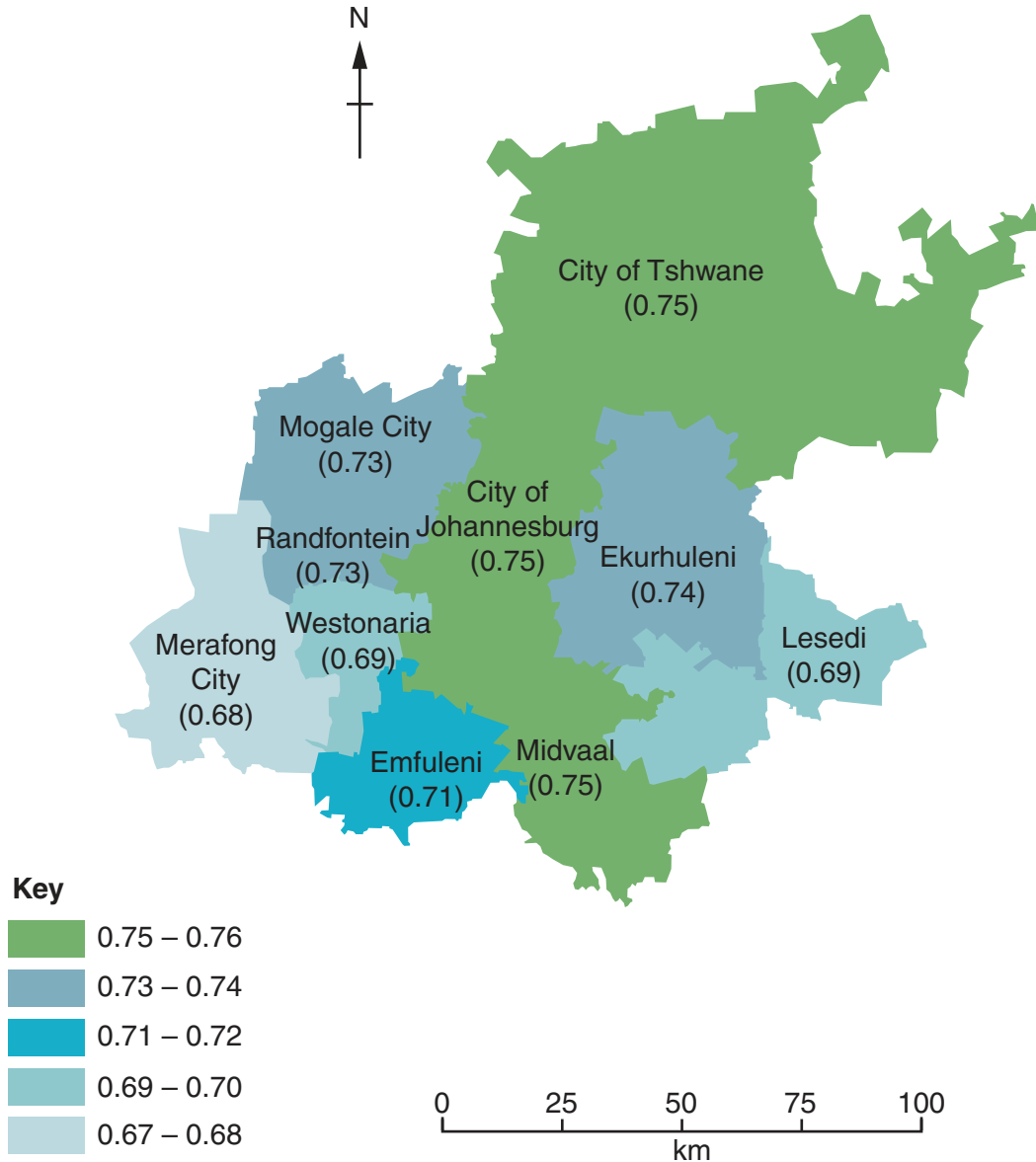


Turn over for Figs. 3A and 3B for Question 8

Figs. 3A and 3B for Question 8

Fig. 3A

Human development index (HDI) for the Gauteng City Region, South Africa, 2012



Human development index comprises three measures: GDP per person in US\$, life expectancy and education (measured by years of schooling).

The average HDI for the whole Gauteng City Region in 2012 was 0.74.

Fig. 3B

Location of Gauteng City Region in South Africa



BLANK PAGE

Permission to reproduce items where third-party owned material protected by copyright is included has been sought and cleared where possible. Every reasonable effort has been made by the publisher (UCLES) to trace copyright holders, but if any items requiring clearance have unwittingly been included, the publisher will be pleased to make amends at the earliest possible opportunity.

To avoid the issue of disclosure of answer-related information to candidates, all copyright acknowledgements are reproduced online in the Cambridge International Examinations Copyright Acknowledgements Booklet. This is produced for each series of examinations and is freely available to download at www.cie.org.uk after the live examination series.

Cambridge International Examinations is part of the Cambridge Assessment Group. Cambridge Assessment is the brand name of University of Cambridge Local Examinations Syndicate (UCLES), which is itself a department of the University of Cambridge.